



Meaning of division

Grade 3 Division Worksheet

Divide the food between the kids. Circle the correct equation.



$5 \times 2 =$

$12 \div 4 =$

$3 \times 3 =$

$6 \div 2 =$

$8 \div 4 =$


$8 - 4 =$

$3 + 3 =$

$6 \times 10 =$

How many bananas does each kid get? ____

How many muffins does each kid get? ____



$6 \div 2 =$

$6 \div 3 =$

$3 \times 4 =$

$12 \div 2 =$

$6 \div 4 =$

$6 \div 6 =$

$12 \div 4 =$

$12 - 4 =$


How many pretzels does each kid get? ____

How many cherries does each kid get? ____

Meaning of division

Grade 3 Division Worksheet

Divide the food between the kids. Circle the correct equation.



$5 \times 2 =$

$12 \div 4 =$

$8 \div 4 =$

$8 - 4 =$

How many bananas does each kid get? **2**




$3 \times 3 =$

$6 \div 2 =$

$3 + 3 =$

$6 \times 10 =$

How many muffins does each kid get? **3**




$6 \div 2 =$

$6 \div 3 =$

$6 \div 4 =$

$6 \div 6 =$

How many pretzels does each kid get? **2**



$3 \times 4 =$

$12 \div 2 =$

$12 \div 4 =$

$12 - 4 =$

How many cherries does each kid get? **3**